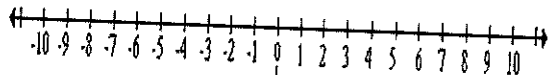
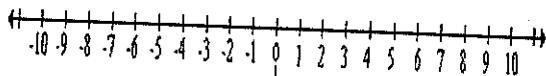


Solve and plot the solution set. Name _____

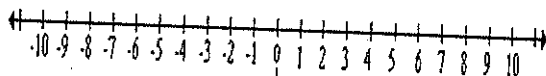
1. $-9 + x \leq -4$



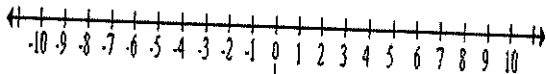
2. $16 > 4x$



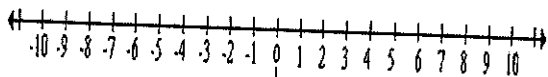
3. $18 < 9x$




4. $-14 \geq 7x$



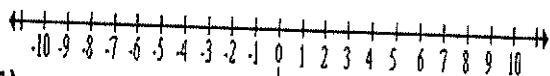
5. $x - (-2) \leq -7$



6. $-7 - x \geq -10$



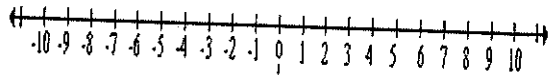
7. $-3 \geq -10 + x$



8. $-10 \geq x + (-4)$



9. $1 < \frac{x}{-3}$



10. $\frac{2x}{3} \geq 6$

